

SANSKAR SCHOOL

GRADE-I

Assignment 29

Date: Thursday, 9th September 2021

ENGLISH:


Use of has/have

Read page 49 and do page 50 in grammar resource book.

14 Has / Have

Look at the following sentences:-


- I **have** many toys.
- You **have** beautiful flowers.
- We **have** a big house.
- They **have** a nice car.
- Vicky and Rahul **have** a pet cat.



- Charu **has** a nice doll.
- Charles **has** a beautiful garden.
- Vinay **has** an old bike .
- She **has** beautiful eyes.
- He **has** a nice bicycle.

A Fill in the blanks with has/have.

1. We two hands.
2. Sahil many friends.
3. You several books.
4. The elephant a short tail.
5. The boy new shoes.
6. Raman two dogs.



English Grammar Book 1

49

7. The girl beautiful hair.
8. Sayyam two cars.
9. Namrata long hair.
10. Mala and Deepak a huge bungalow.



B Tick (✓) the correct answer in the given box.

1. Rahul and I have/has many candies.
2. The school have/has many students.
3. Jyoti have/has a pet dog.
4. The cow have/has four legs.
5. Shweta and Mona have/has many bags.
6. My dog have/has a long tail.
7. You have/has many story books.
8. Mr Bose have/has a huge house.
9. Pinku and Sneha have/has two parrots.
10. These boys have/has blue eyes.



MATHS:

Do pages 27 and 28 in maths resource book.

4. Solve the following.

- (a) There are 4 ducks in the park. 3 have gone swimming. How many ducks are left outside?

$$\square - \square = \square$$

\square duck is left outside.



- (b) There were 8 children in the amusement park. 3 of them were wearing hats. How many children were not wearing hats?

$$\square - \square = \square$$

\square children were not wearing hats.



MIXED WORD PROBLEMS



EXERCISE 1H

Read the word problems carefully and decide if we have to add or subtract to solve. One has been done for you.

1. 6 cows were in the barn.

2 more cows came into the barn.

How many cows were in the barn then?



There were _____ cows in the barn then.

Workspace

We have to find total number of cows in barn. So, we have to add.

$$\begin{array}{r} 6 \\ + 2 \\ \hline 8 \end{array}$$



2. 7 balls were on the table.

2 balls fell off the table.

How many balls were left on the table?

_____ balls were left on the table.

3. There were 5 birds in the pond.

3 more birds joined them.

How many birds were there altogether?

There were _____ birds altogether.



Workspace



4. 8 toy cars were in the box. Rita took 5 cars out of the box.

How many cars were left in the box?

_____ cars were left in the box.

5. 6 rabbits were eating.

3 rabbits ran away.

How many rabbits were left eating?

_____ rabbits were left eating.



HOTS

1. Use addition and subtraction to make number 7. Do not repeat the numbers

$$\square + \square = 7$$

$$\square + \square = 7$$

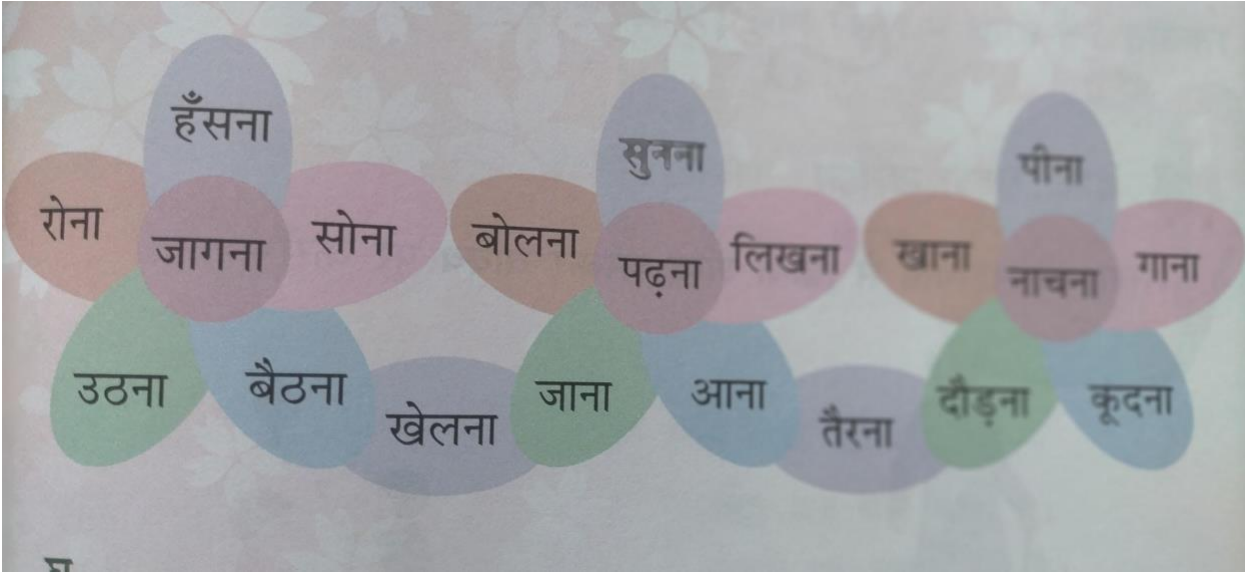
$$\square - \square = 7$$

2. Write the numbers 4, 5 and 6 on the cups so that the sum of each side is 9.



Hindi-

कुछ क्रिया शब्दों को पढ़ें।



नीचे लिखे शब्दों में से क्रिया शब्दों पर गोला (o) लगाओ।

वह ,खेलना, कूदना, रोहन ,सब, स्कूल, नाचना, पढ़ना, लिखना, रमेश ,घूमना, दादाजी, देखना, जयपुर, मंदिर, सोचना।

नीचे लिखे गद्यांश को पढ़कर प्रश्नों के उत्तर लिखिए।

रविवार का दिन था। रचना सुबह जल्दी उठ गई। उसने देखा सूरज उग रहा था और चिड़िया चहक रही थी। दादाजी बगीचे में टहल रहे थे। एक बच्चा रो रहा था क्योंकि वह झूले से गिर गया था। पास में एक बिल्ली सीढ़ियों पर बैठी थी। विराट बगीचे में पतंग उड़ा रहा था। यह सब देख कर रचना को बहुत अच्छा लगा उसने भी ठान लिया कि वह अब रोज सुबह जल्दी उठेगी और दादाजी के साथ बगीचे में घूमने जाएगी। दूसरे दिन वह जल्दी उठी और उसने देखा कि बगीचे में रंग- बिरंगी तितलियां उड़ रही थी एक बच्चा बगीचे में पढ़ रहा था। यह नज़ारा रचना को बहुत अच्छा लगा।

क. बगीचे में कौन टहल रहे थे?

ख. कौन सा दिन था?

ग. बच्चा क्यों रो रहा था?

घ.अनुच्छेद में आए क्रिया शब्दों को लिखें।

UOI-

Watch the video carefully.

https://youtu.be/uQN_QN4grAk

Task-Make a flow chart on development of transport overtime on coloured sheet.

Help box-Olden days,Discovery of wheel,Discovery of steam engine,Water transport,Air transport,land transport ,

ART

Draw and color a boat with the help of basic shapes. Follow the reference video given below.

https://youtu.be/-z3wLCx00_1

Dance-

<https://youtu.be/EGKxiRdnbc>

Dance task - watch and learn ballet dance part 2